


Name _____

- 1 Use the array to complete the number sentences.



$$\square \times \square = \square$$

$$\square \times \square = \square$$

$$\square \div \square = \square$$

$$\square \div \square = \square$$

2 marks

- 2 A shop has 32 apples.
They are put into 8 equal groups.
How many apples are in each group?

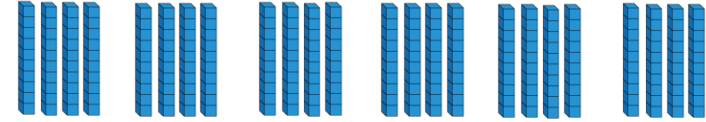
_____ apples

1 mark

- 3 Use the diagrams to help you.



$$6 \times 4 = \square$$



$$6 \times 40 = \square$$

2 marks


- 4 Complete the calculation.

	Tens	Ones

	T	0
	1	3
×		3
<hr/>		

1 mark

- 5 There are 4 jars of sweets.
Each jar has 23 sweets.
How many sweets are there altogether?



	T	0
×		
<hr/>		

_____ sweets

1 mark

- 6 Evie has calculated 21×4
Her answer is 804
Explain her mistake.

	T	O
	2	1
×		4
<hr/>		
8	0	4

1 mark

- 7 Work out 37×5

2 marks

- 8 Calculate $96 \div 3 =$


Use the place value grid to help.

Tens			Ones	
10	10	10	1	1
10	10	10	1	1
10	10	10	1	1

Calculate $84 \div 4 =$

1 mark

- 9 Amir makes groups of 3 gummy bears.



1 mark

He makes 7 groups and has 2 bears left over.
How many gummy bears does he have altogether?

_____ gummy bears

1 mark

- 10 There are 25 green cubes in a box.
There are 5 times as many blue cubes than green cubes in the box.
How many cubes are there **altogether**?

2 marks

1 mark

_____ cubes

2 marks

Circle how confident you feel with multiplication & division.

1 mark

1 2 3 4 5
Not Very
confident confident