


Name _____

1 Complete the sentences.

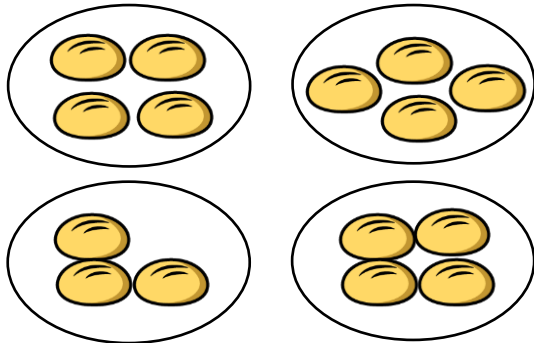


There are _____ equal groups of 5 bananas.



There are _____ equal groups of _____ fish.

2 Tick the group that is **not** equal to the others.



2 marks

1 mark

3



Complete the addition sentence to work out how many apples in total.

$$\boxed{3} + \boxed{} + \boxed{} + \boxed{} + \boxed{} = \boxed{}$$

1 mark

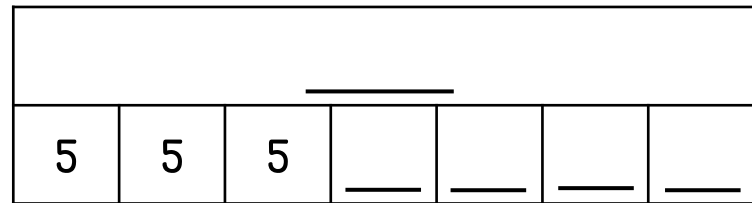
Complete the multiplication sentence to work out how many apples in total.

$$\boxed{} \times \boxed{3} = \boxed{}$$

1 mark

4

Complete the bar model to show $7 \times 5 =$



1 mark

